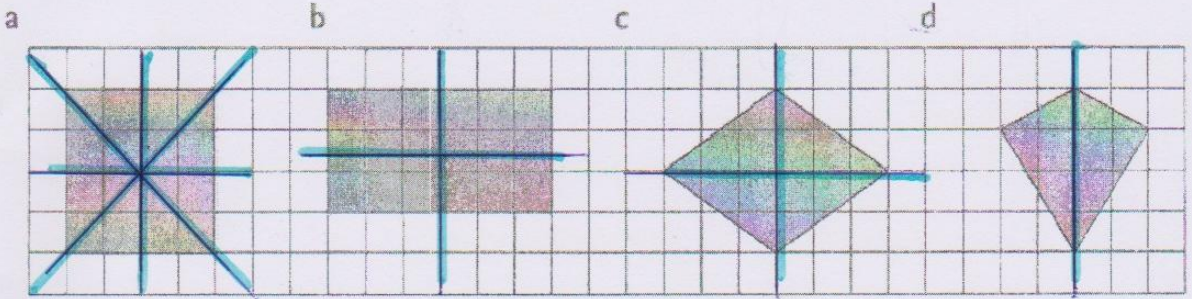


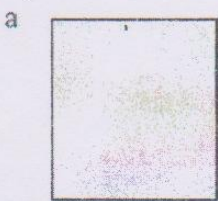


# Symmetry

1 Copy the following shapes and mark in all the axes of symmetry. Do all of these shapes have line symmetry?




2 How many axes of symmetry has each shape below?




Square




Rectangle



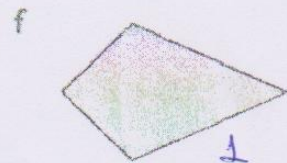
Parallelogram



Trapezium



Rhombus




Kite

3 a Which of the shapes below have point symmetry?  
b Which shapes also have line symmetry?



A



B



C



D

• point of symmetry: yes

yes

yes

yes

• Line of symmetry: No

Yes

No

Yes