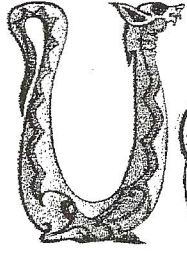



Co - interior Angles

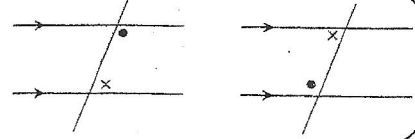
الزوايا الداخلية



إذا توازي مستقيمين وقطعهما قاطع ، فإن الزوايا الداخلية مجموع قياسها 180° .

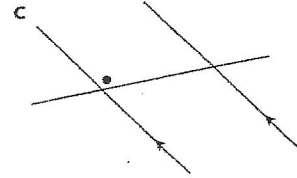
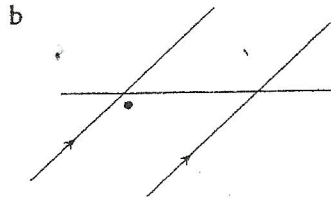
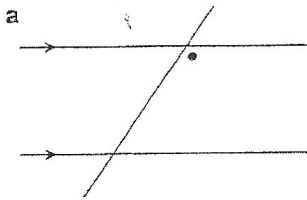


When two lines are parallel, the two pairs of co-interior angles formed by a transversal are supplementary.



Mark in the angle that is Co-interior to the angle marked with the dot.

ضعي نقطة متداخلة مع النقاط المرسومة في كل شكل .



*Use your knowledge of alternate angles to determine the measurements of the angles marked with a question mark.

